

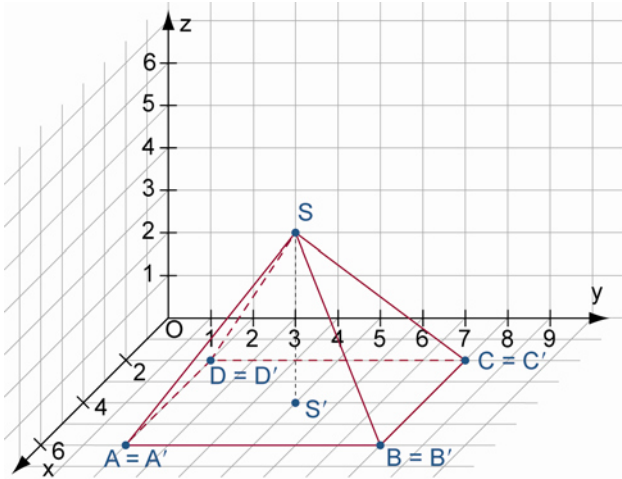
Ablezen von Koordinaten in Schrägrissbildern

Arbeitsblatt

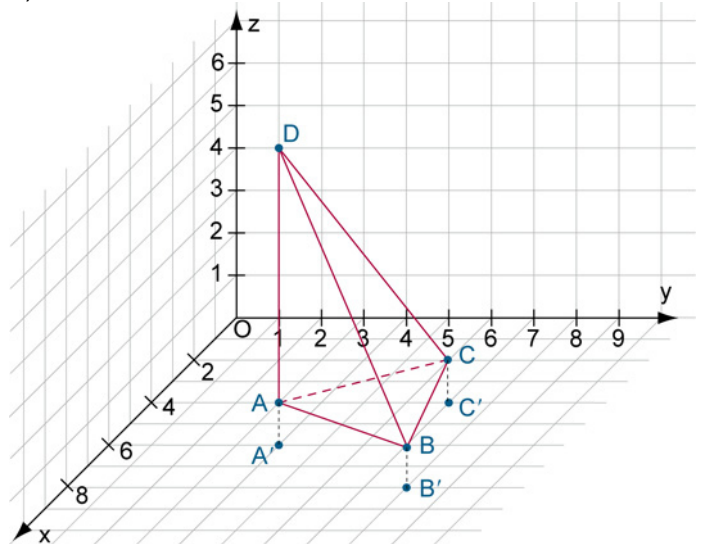


1 Lest die Koordinaten der Eckpunkte aus den Schrägrissdarstellungen ab.

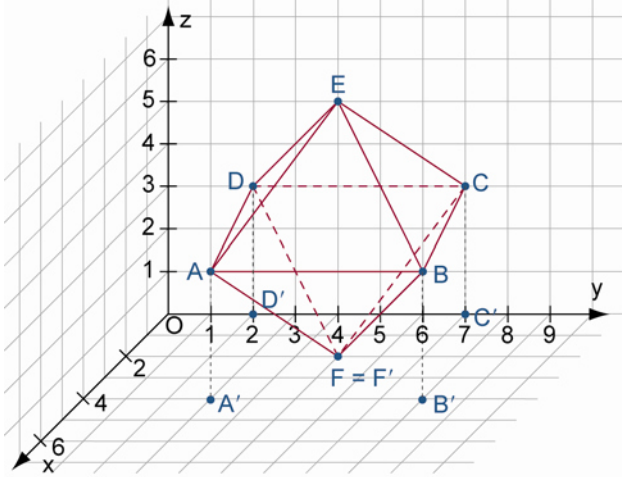
a)



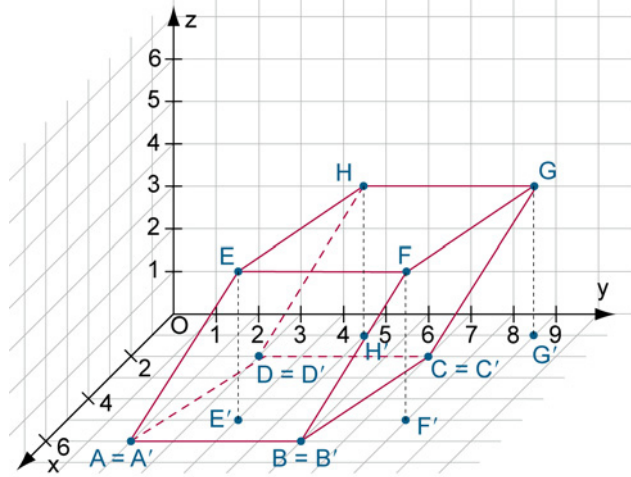
b)



c)



d)



Ablezen von Koordinaten in Schrägrissbildern

Arbeitsblatt – Lösungen

- 1 a) $A(6|2|0)$, $B(6|8|0)$, $C(2|8|0)$, $D(2|2|0)$, $S(4|5|4)$
b) $A(6|4|1)$, $B(8|8|1)$, $C(4|7|1)$, $D(4|3|6)$
c) $A(4|3|3)$, $B(4|8|3)$, $C(0|7|3)$, $D(0|2|3)$, $E(2|5|6)$, $F(2|5|0)$
d) $A(6|2|0)$, $B(6|6|0)$, $C(2|7|0)$, $D(2|3|0)$, $E(5|4|3,5)$, $F(5|8|3,5)$, $G(1|9|3,5)$, $H(1|5|3,5)$