









1.  $8 - 7 =$ _____


8.  $6 - 2 =$ _____


2.  $9 - 2 =$ _____


9.  $9 - 6 =$ _____


3.  $5 - 2 =$ _____


10.  $4 - 2 =$ _____


4.  $10 - 1 =$ _____


11.  $5 - 4 =$ _____

5.  $7 - 2 =$ _____

12.  $9 - 3 =$ _____

6.  $10 - 0 =$ _____

13.  $6 - 5 =$ _____

7.  $8 - 3 =$ _____