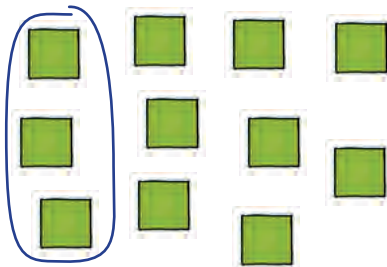



① Kreise immer 3 ein. Wie viele Kreise brauchst du?

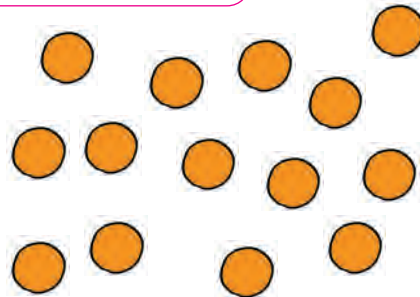
$$12 : 3 = \underline{\quad}$$



$$21 : 3 = \underline{\quad}$$




$$15 : 3 = \underline{\quad}$$




② Kreise immer 2 ein. Wie viele Kreise brauchst du?

$$8 : 2 = \underline{\quad}$$



$$14 : 2 = \underline{\quad}$$



$$10 : 2 = \underline{\quad}$$

