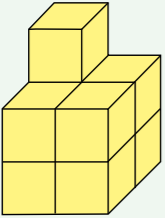
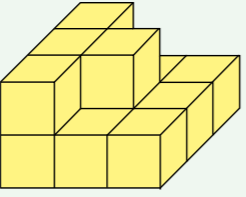
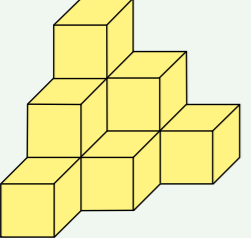
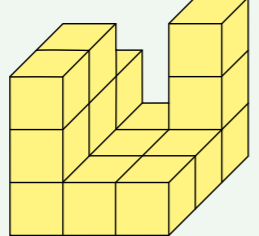
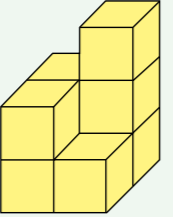


1| Welches Würfelgebäude passt zum Bauplan? Ordne zu.

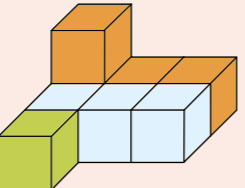
<p>A</p> 	<p>B</p> 	<input type="checkbox"/> <table border="1" style="display: inline-table; border-collapse: collapse;"> <tr><td>3</td><td>2</td></tr> <tr><td>2</td><td>2</td></tr> </table>	3	2	2	2									
3	2														
2	2														
<p>C</p> 	<p>D</p> 	<input type="checkbox"/> <table border="1" style="display: inline-table; border-collapse: collapse;"> <tr><td>3</td><td>2</td><td>1</td></tr> <tr><td>2</td><td>1</td><td>0</td></tr> <tr><td>1</td><td>0</td><td>0</td></tr> </table>	3	2	1	2	1	0	1	0	0				
3	2	1													
2	1	0													
1	0	0													
<p>E</p> 	<input type="checkbox"/> <table border="1" style="display: inline-table; border-collapse: collapse;"> <tr><td>2</td><td>1</td><td>1</td></tr> <tr><td>2</td><td>2</td><td>1</td></tr> <tr><td>2</td><td>1</td><td>1</td></tr> </table>	2	1	1	2	2	1	2	1	1	<input type="checkbox"/> <table border="1" style="display: inline-table; border-collapse: collapse;"> <tr><td>2</td><td>3</td></tr> <tr><td>2</td><td>1</td></tr> </table>	2	3	2	1
2	1	1													
2	2	1													
2	1	1													
2	3														
2	1														
		<input type="checkbox"/> <table border="1" style="display: inline-table; border-collapse: collapse;"> <tr><td>2</td><td>1</td><td>3</td></tr> <tr><td>3</td><td>1</td><td>1</td></tr> <tr><td>3</td><td>1</td><td>1</td></tr> </table>	2	1	3	3	1	1	3	1	1				
2	1	3													
3	1	1													
3	1	1													

2| Wie viele Würfelbausteine benötigst du, um die Würfelgebäude aus Aufgabe 1 zu bauen? Schreibe auf.

A	B
C	D
E	

Merke dir:

Der Bauplan zeigt, wie viele Würfel übereinander liegen.




2	1	1
1	1	1
1	0	0

★ Baue die Würfelgebäude aus Aufgabe 1 mit Würfelbausteinen nach. Baue danach die Würfelgebäude zu diesen Bauplänen. Du brauchst maximal 15 Würfelbausteine.


<table border="1" style="border-collapse: collapse;"> <tr><td>3</td><td>2</td></tr> <tr><td>3</td><td>2</td></tr> </table>	3	2	3	2	<table border="1" style="border-collapse: collapse;"> <tr><td>5</td><td>4</td></tr> <tr><td>3</td><td>2</td></tr> </table>	5	4	3	2	<table border="1" style="border-collapse: collapse;"> <tr><td>1</td><td>1</td><td>1</td><td>1</td></tr> <tr><td>4</td><td>3</td><td>2</td><td>2</td></tr> </table>	1	1	1	1	4	3	2	2											
3	2																												
3	2																												
5	4																												
3	2																												
1	1	1	1																										
4	3	2	2																										
<table border="1" style="border-collapse: collapse;"> <tr><td>1</td><td>1</td><td>1</td></tr> <tr><td>2</td><td>3</td><td>2</td></tr> <tr><td>1</td><td>1</td><td>1</td></tr> </table>	1	1	1	2	3	2	1	1	1	<table border="1" style="border-collapse: collapse;"> <tr><td>2</td><td>2</td><td>2</td></tr> <tr><td>1</td><td>1</td><td>1</td></tr> <tr><td>1</td><td>1</td><td>1</td></tr> </table>	2	2	2	1	1	1	1	1	1	<table border="1" style="border-collapse: collapse;"> <tr><td>2</td><td>4</td><td>3</td></tr> <tr><td>2</td><td>1</td><td>0</td></tr> <tr><td>3</td><td>0</td><td>0</td></tr> </table>	2	4	3	2	1	0	3	0	0
1	1	1																											
2	3	2																											
1	1	1																											
2	2	2																											
1	1	1																											
1	1	1																											
2	4	3																											
2	1	0																											
3	0	0																											
<table border="1" style="border-collapse: collapse;"> <tr><td>5</td><td>5</td><td>1</td><td>1</td></tr> <tr><td>3</td><td>0</td><td>0</td><td>0</td></tr> </table>	5	5	1	1	3	0	0	0	<table border="1" style="border-collapse: collapse;"> <tr><td>3</td><td>1</td><td>3</td></tr> <tr><td>1</td><td>1</td><td>1</td></tr> <tr><td>1</td><td>1</td><td>1</td></tr> </table>	3	1	3	1	1	1	1	1	1	<table border="1" style="border-collapse: collapse;"> <tr><td>0</td><td>2</td><td>2</td></tr> <tr><td>2</td><td>3</td><td>2</td></tr> <tr><td>2</td><td>2</td><td>0</td></tr> </table>	0	2	2	2	3	2	2	2	0	
5	5	1	1																										
3	0	0	0																										
3	1	3																											
1	1	1																											
1	1	1																											
0	2	2																											
2	3	2																											
2	2	0																											

Lösungen

1| 

2|

A	B
C	D
E	



<input style="width: 80%; height: 40px;" type="text"/>	<input style="width: 80%; height: 40px;" type="text"/>	<input style="width: 80%; height: 40px;" type="text"/>
Richtig klasse!	Gut!	Könnte besser sein!