

# Strategie: Mitte finden



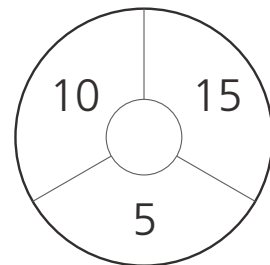
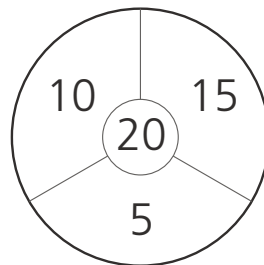
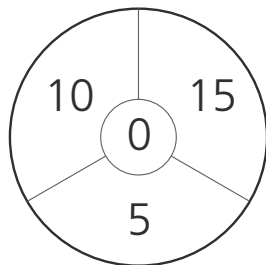
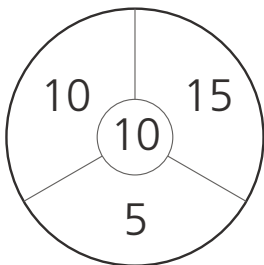
1. Ist die Strategie günstig?  
Kreuze an.

5 + 7 6 + 6 = 12	
5 + 9 ___ + ___ = ___	
9 + 11 ___ + ___ = ___	
3 + 5 ___ + ___ = ___	
9 + 7 ___ + ___ = ___	
3 + 13 ___ + ___ = ___	
4 + 12 ___ + ___ = ___	
2 + 3 ___ + ___ = ___	
8 + 10 ___ + ___ = ___	
10 + 8 ___ + ___ = ___	

12 + 12 ___ + ___ = ___	
4 + 6 ___ + ___ = ___	
7 + 11 ___ + ___ = ___	
6 + 8 ___ + ___ = ___	
6 + 10 ___ + ___ = ___	
7 + 5 ___ + ___ = ___	
8 + 9 ___ + ___ = ___	
6 + 4 ___ + ___ = ___	
14 + 6 ___ + ___ = ___	
6 + 12 ___ + ___ = ___	

## 2. Rechenscheiben.

M



\_\_\_\_\_

\_\_\_\_\_

\_\_\_\_\_

\_\_\_\_\_

