


Multiplikation

1. Wie viele Sterne sind auf der Gardine?






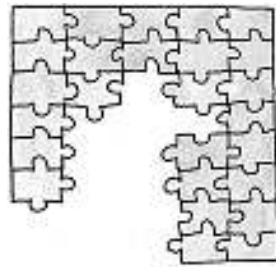


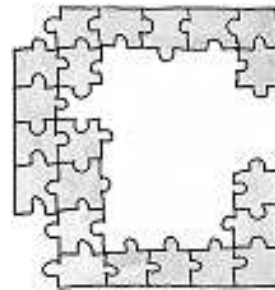


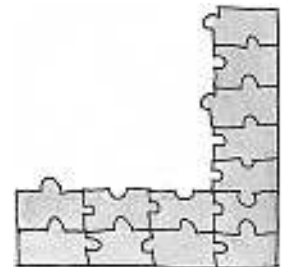
2. Wie viele Teile hat das fertige Puzzle?



$5 \cdot 5 = 25$





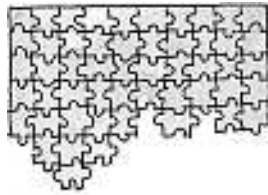


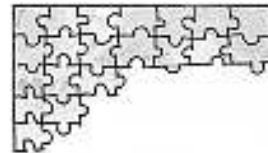
3. Wie viele Teile kann das fertige Puzzle haben?

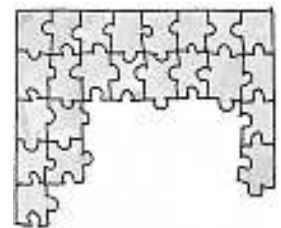
a)



20, 25, 30,







b)

