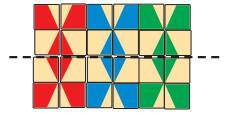
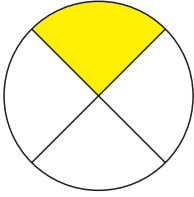


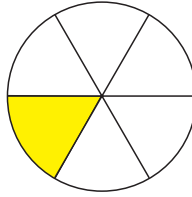
Wie heißen diese Bruchteile?



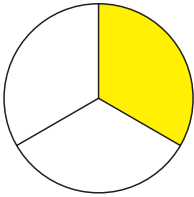
13



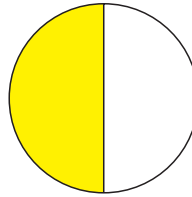
14



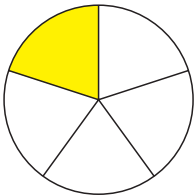
15



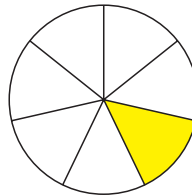
16



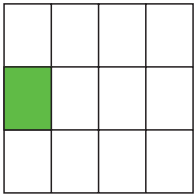
17



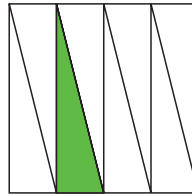
18



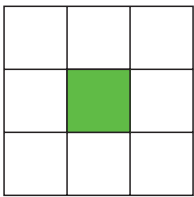
19




20



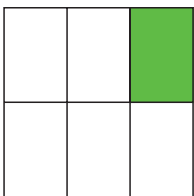
21



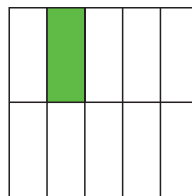
22



23



24



ein Drittel 13

ein Fünftel 22

ein Halbes 18

ein Sechstel 15

ein Siebtel 14

ein Viertel 17

ein Achtel 24

ein Neuntel 20

ein Sechstel 23

ein Viertel 16

ein Zehntel 19

ein Zwölftel 21