
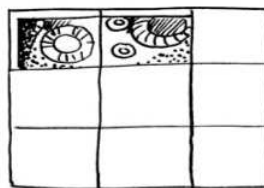

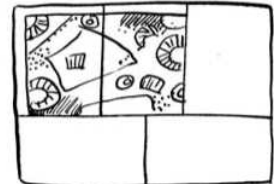



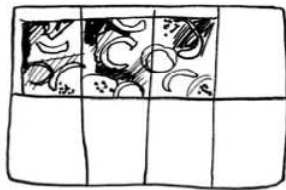
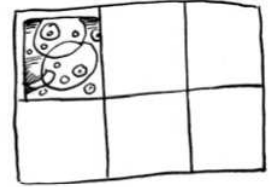



# Bruchteile bestimmen



Welcher Bruchteil von den ganzen runden oder rechteckigen Pizzen ist noch übrig?



Ordne die Bruchteile der Größe nach. Beginne jeweils mit dem kleinsten Stück.

Runde Pizzen:  <  <  <  <  <  <  <

Rechteckige Pizzen:  <  <  <  <  <  <  <